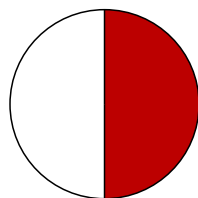


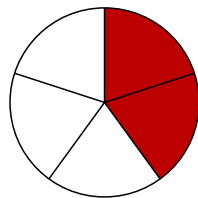

Bruchrechnen mit Wind und Regen

Kreise die Menge ein, die du bekommst und schreibe den Anteil auf.

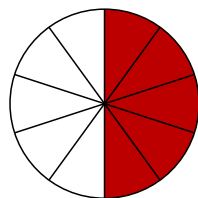
Du bekommst:



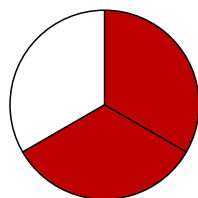
1 von 2
Regenschirmen:



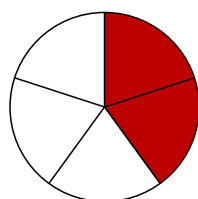

2 von 5
Kürbissen:



5 von 10
Blättern:



2 von 3
Kastanien:



4 von 5
Schals:

