

Rechnen bis 100 mit Übergang

Rechne und kontrolliere selbstständig.



1

$64 + 14 = \underline{78}$

$72 + 10 = \underline{82}$

$50 + 17 = \underline{67}$

$74 + 5 = \underline{79}$

$20 + 6 = \underline{26}$

$19 + 52 = \underline{71}$

$27 + 38 = \underline{65}$

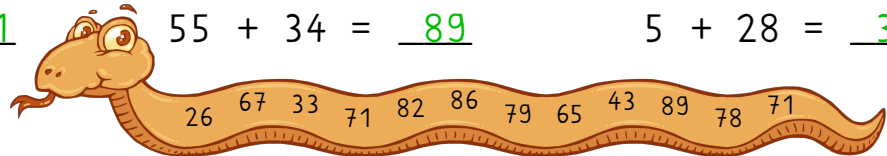
$14 + 29 = \underline{43}$

$37 + 49 = \underline{86}$

$20 + 51 = \underline{71}$

$55 + 34 = \underline{89}$

$5 + 28 = \underline{33}$



2

$89 - 23 = \underline{66}$

$96 - 78 = \underline{18}$

$68 - 58 = \underline{10}$

$48 - 4 = \underline{44}$

$51 - 40 = \underline{11}$

$69 - 22 = \underline{47}$

$69 - 48 = \underline{21}$

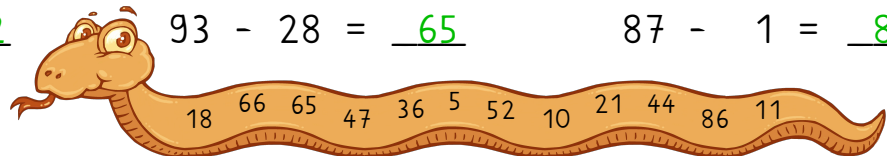
$63 - 27 = \underline{36}$

$26 - 21 = \underline{5}$

$55 - 3 = \underline{52}$

$93 - 28 = \underline{65}$

$87 - 1 = \underline{86}$



3

$65 + 26 = \underline{91}$

$28 + 39 = \underline{67}$

$70 + 12 = \underline{82}$

$33 - 10 = \underline{23}$

$46 - 25 = \underline{21}$

$95 - 31 = \underline{64}$

$79 - 47 = \underline{32}$

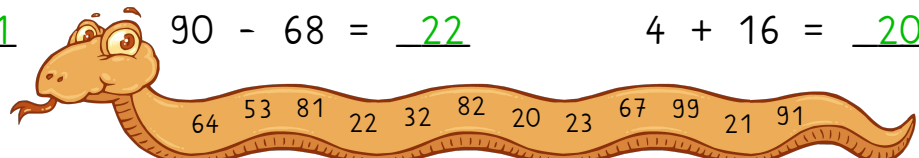
$11 + 88 = \underline{99}$

$85 - 32 = \underline{53}$

$23 + 58 = \underline{81}$

$90 - 68 = \underline{22}$

$4 + 16 = \underline{20}$



Wie viele Aufgaben hattest du richtig?

Aufgabe 1 Aufgabe 2 Aufgabe 3