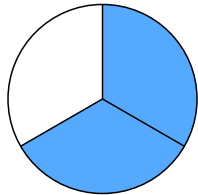


Bruchrechnen mit Schnee und Eis

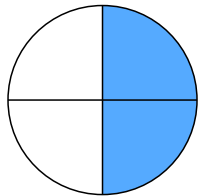

Kreise die Menge ein, die du bekommst und schreibe den Anteil auf.

Du bekommst:

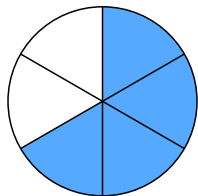


8 von 12
Eisbären:

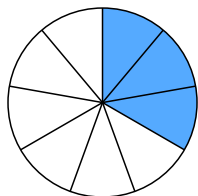
$\frac{2}{3}$



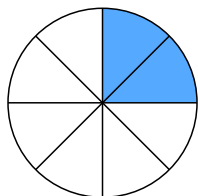


2 von 4
Schneemännern:



4 von 6
Schneeschippen:



3 von 9
Schlitten:



2 von 8
Mützen:

