

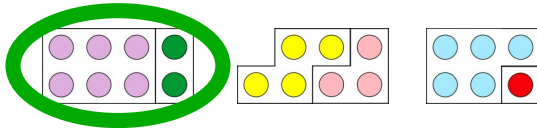
Name: _____

Datum: _____

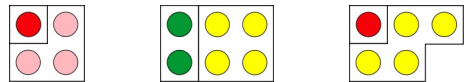
Klasse: _____

1

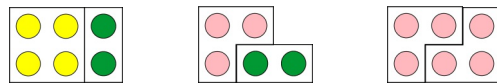
$6 + 2 =$



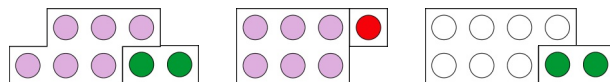
$1 + 4 =$



$3 + 2 =$

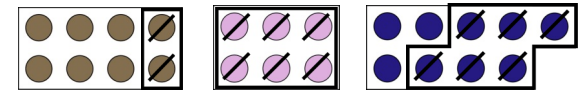


$7 + 2 =$

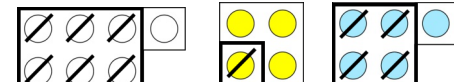


2

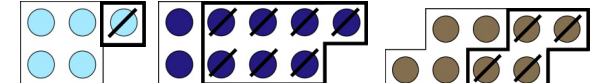
$9 - 6 =$



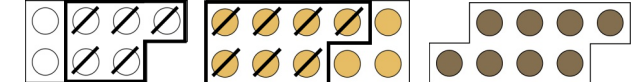
$7 - 6 =$



$9 - 7 =$

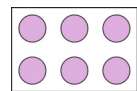
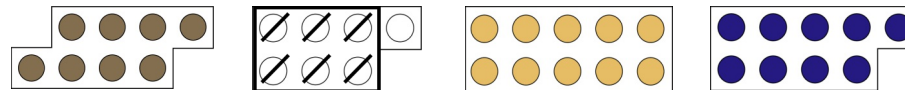


$10 - 7 =$



Kreise das passende Bild ein.

3



9

