

Name: \_\_\_\_\_

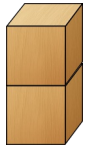
Datum: \_\_\_\_\_

Kl.1

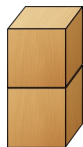
1) Größer, kleiner oder gleich?



=



$$\boxed{2} > \boxed{1}$$



$$\square \circ \square$$



$$\square \circ \square$$

2)

$$1 < 4$$

$$4 > 1$$

$$3 < 5$$

$$5 > 3$$

$$4 > 3$$

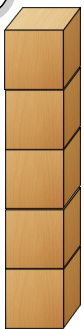
$$5 = 5$$

$$5 > 2$$

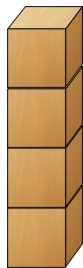
$$0 < 4$$

$$0 < 5$$

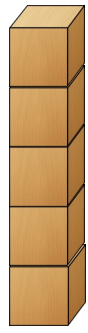
3)



$$\square \circ \square$$



$$\square \circ \square$$



$$\square \circ \square$$

4)

$$10 > 9$$

$$10 > 7$$

$$1 < 5$$

$$6 < 8$$

$$0 < 9$$

$$7 > 4$$

$$2 > 0$$

$$8 = 8$$

$$5 < 10$$

Diese Aufgaben waren für mich:

