

Name: _____

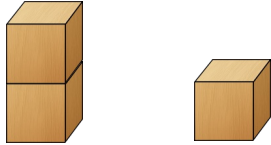
Datum: _____

Kl.1


1 Größer, kleiner oder gleich?




=



>



○




○

2 1 ○ 4

4 ○ 1

3 ○ 5



5 ○ 3

4 ○ 3

5 ○ 5

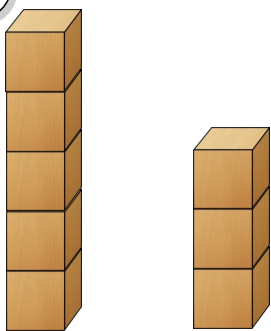
5 ○ 2

0 ○ 4


0 ○ 5



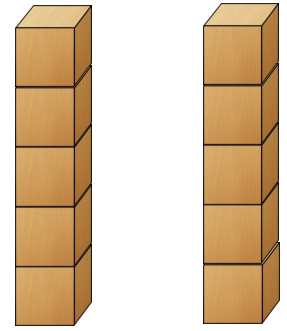
3



○



○



○

4



10 ○ 9

10 ○ 7

1 ○ 5



6 ○ 8

0 ○ 9

7 ○ 4

2 ○ 0

8 ○ 8

5 ○ 10

Diese Aufgaben waren für mich:

