

Name: _____


Datum: _____

Kl.1


1 Größer, kleiner oder gleich?




=



2 > 1



○




○

2 1 < 4

4 > 1

3 < 5



5 > 3

4 > 3

5 = 5

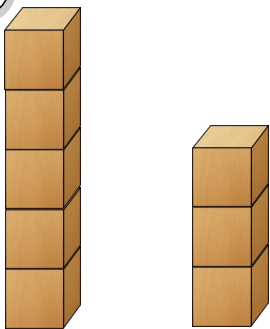
5 > 2

0 < 4


0 < 5



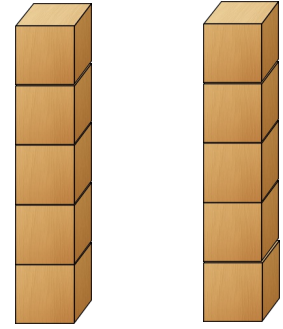
3



○



○



○



10 > 9

10 > 7

1 < 5



6 < 8

0 < 9

7 > 4

2 > 0

8 = 8

5 < 10

Diese Aufgaben waren für mich:

