

Name: \_\_\_\_\_



Datum: \_\_\_\_\_

Kl.1

1) Größer, kleiner oder gleich?



=



$>$

$<$

$<$

2) 1  $<$  4

4  $<$  1

3  $<$  5

5  $<$  3

4  $<$  3

5  $<$  5


5  $<$  2

0  $<$  4

0  $<$  5



3)



$<$

$<$

$<$

4)



10  $<$  9

10  $<$  7

1  $<$  5



6  $<$  8

0  $<$  9

7  $<$  4

2  $<$  0

8  $<$  8

5  $<$  10

Diese Aufgaben waren für mich:

