

Name: _____



Datum: _____

Kl.1

1) Größer, kleiner oder gleich?



=



>

○

○

2) 1 < 4

4 > 1

3 < 5

5 > 3

4 > 3

5 = 5




5 > 2

0 < 4

0 < 5



3)



○

○

○

4)



10 > 9

10 > 7

1 < 5



6 < 8

0 < 9

7 > 4

2 > 0

8 = 8

5 < 10

Diese Aufgaben waren für mich:

