

Name: _____





Datum: _____

Klasse: _____

Zeit Zeit Zeit





Wie spät ist es? Verwende die Zeiten der zweiten Tageshälfte!

Four analog clocks are shown on a blue background. Each clock has a blank line below it followed by the word "Uhr".

			
_____ Uhr	_____ Uhr	_____ Uhr	_____ Uhr





Wie spät ist es? Verwende die Zeiten der ersten Tageshälfte!

Four analog clocks are shown on an orange background. Each clock has a blank line below it followed by the word "Uhr".

			
_____ Uhr	_____ Uhr	_____ Uhr	_____ Uhr

Wie spät ist es? Schreibe beide Uhrzeiten auf!

Four analog clocks are shown on a green background. Each clock has two blank lines below it, each followed by the word "Uhr".

			
_____ Uhr	_____ Uhr	_____ Uhr	_____ Uhr
_____ Uhr	_____ Uhr	_____ Uhr	_____ Uhr